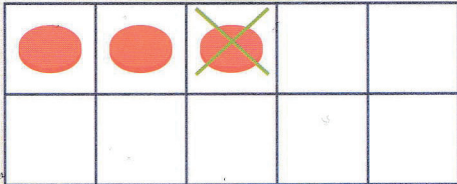


Correction

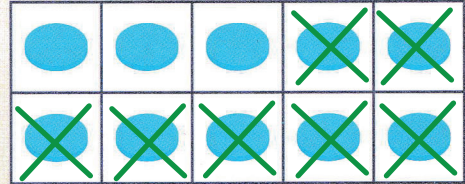
À mon tour

1 ✂ Pour chaque soustraction, barre les jetons ● à soustraire.

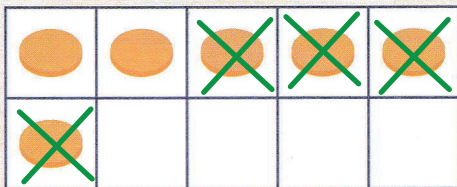
1 2 3 ✂ Complète ensuite l'égalité.



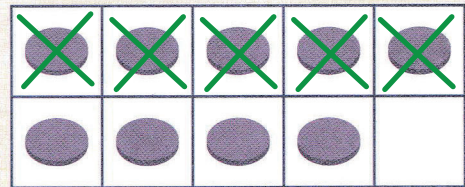
$$3 - 1 = \boxed{2}$$



$$10 - 7 = \boxed{3}$$




$$6 - 2 = \boxed{4}$$




$$9 - 5 = \boxed{4}$$

2 1 2 3 ✂ Compte les cubes ■ et complète.



Il y a 10 cubes ■ sur la table.



On enlève 4 cubes ■.

Il reste 6 cubes ■ sur la table.

$$\boxed{10} - \boxed{4} = \boxed{6}$$